

Numération 2: Les fractions



....
....


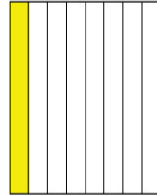



....
....

....
....

....
....

....
....

1 Ecris les fractions correspondantes à la partie colorée



/2,5 pts

.....

.....

.....

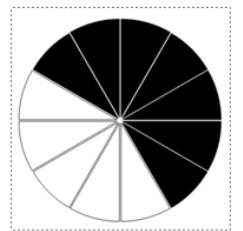
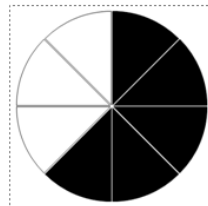
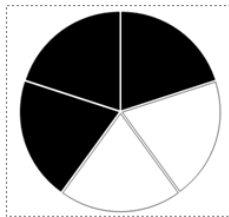
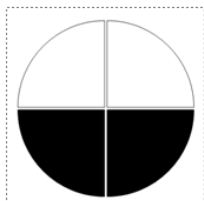
.....

.....

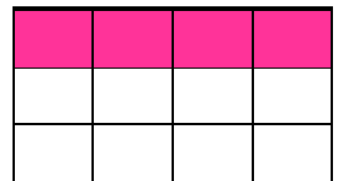

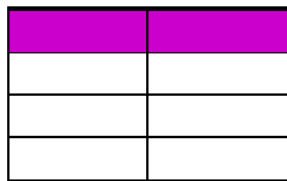
3. À côté de chaque fraction, indique la fraction correspondante à la partie grisée.



2) Ecris la fraction correspondant à la partie coloriée:



___ ou ___



___ ou ___

___ ou ___