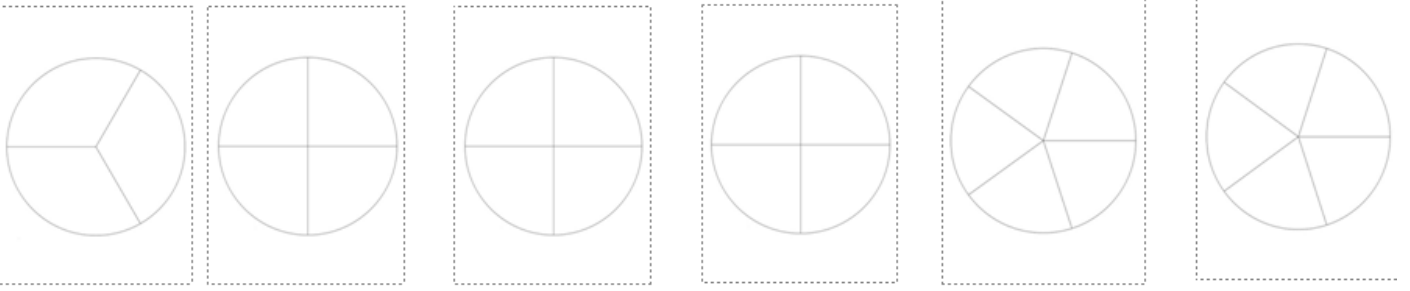


Numération 2: Les fractions

Je sais représenter une fraction courante.

1) Colorie la partie correspondant à la fraction:



$$\frac{2}{3}$$

$$\frac{3}{4}$$

$$\frac{1}{2}$$

$$\frac{2}{4}$$

$$\frac{3}{5}$$

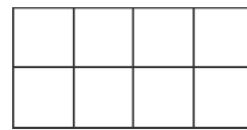
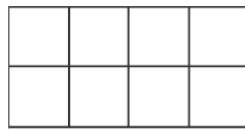

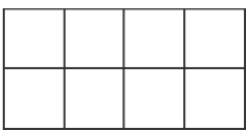
$$\frac{5}{5}$$

2. Sur chacun des segments unités suivants, colorie la partie correspondante à la fraction indiquée:



2 A TOI DE COLORIER LES FRACTIONS CORRESPONDANTES.

/8



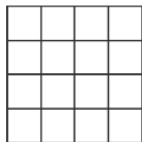
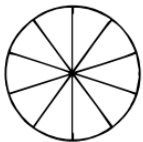


$$\frac{1}{8}$$

$$\frac{1}{2}$$

$$\frac{3}{4}$$

$$\frac{7}{8}$$






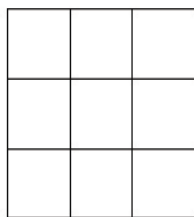
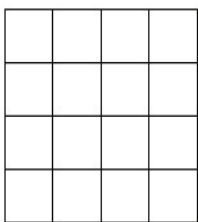
$$\frac{3}{10}$$

$$\frac{2}{8}$$

$$\frac{3}{10}$$

$$\frac{8}{100}$$

2 Sers-toi des quadrillages pour représenter les fractions proposées



$$\frac{1}{2}$$

$$\frac{2}{3}$$

$$\frac{3}{4}$$

$$\frac{7}{8}$$

$$\frac{2}{6}$$