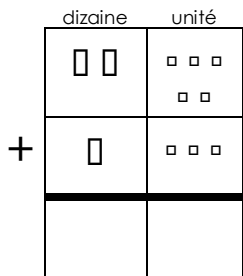
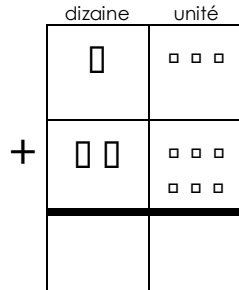




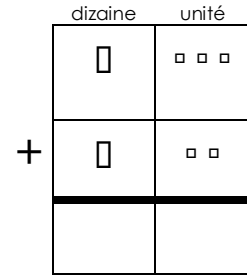
Calcule.



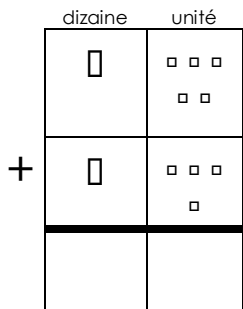
$25 + 13 = \underline{\quad}$



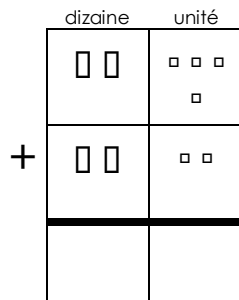
$13 + 26 = \underline{\quad}$



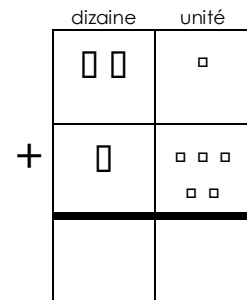
$13 + 12 = \underline{\quad}$



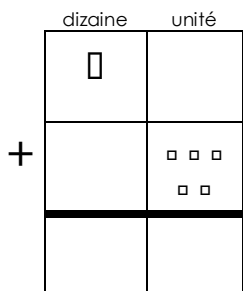
$15 + 14 = \underline{\quad}$



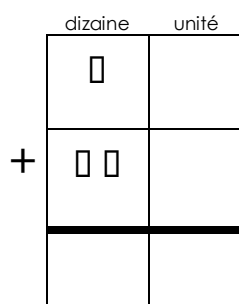
$24 + 22 = \underline{\quad}$



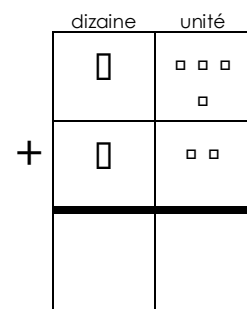
$21 + 15 = \underline{\quad}$



$10 + 5 = \underline{\quad}$



$10 + 20 = \underline{\quad}$



$14 + 12 = \underline{\quad}$